

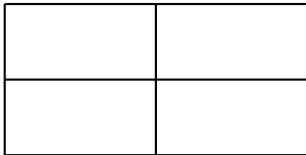
1 Exercises

1.1 Exercise

Shade the diagram to represent the fraction.

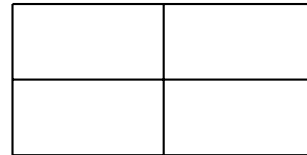
1.

$$\frac{1}{4}$$



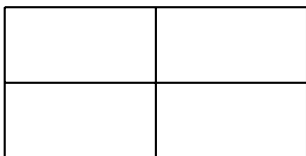
2.

$$\frac{2}{4}$$



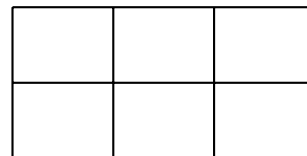
3.

$$\frac{4}{4}$$



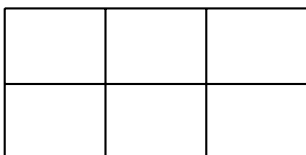
4.

$$\frac{1}{6}$$



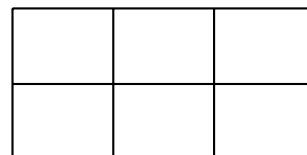
5.

$$\frac{2}{6}$$



6.

$$\frac{4}{6}$$



7.

$$\frac{5}{6}$$

8.

$$\frac{1}{8}$$

9.

$$\frac{3}{8}$$

10.

$$\frac{5}{8}$$

11.

$$\frac{6}{8}$$

12.

$$\frac{8}{8}$$

13.

$$\frac{8}{9}$$

14.

$$\frac{5}{10}$$

15.

$$\frac{6}{10}$$

16.

$$\frac{10}{10}$$

17.

$$\frac{5}{12}$$

18.

$$\frac{9}{12}$$

19.

$$\frac{2}{15}$$

20.

$$\frac{4}{15}$$

21.

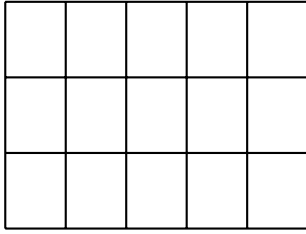
$$\frac{10}{15}$$

22.

$$\frac{13}{15}$$


23.

$$\frac{14}{15}$$



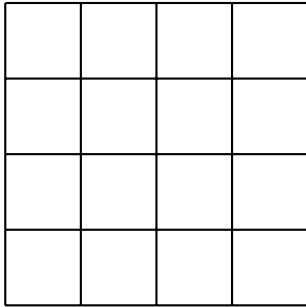
24.

$$\frac{15}{15}$$



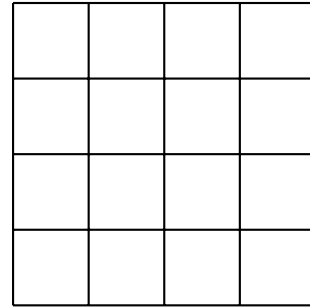
25.

$$\frac{2}{16}$$



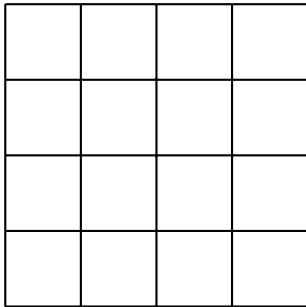
26.

$$\frac{4}{16}$$



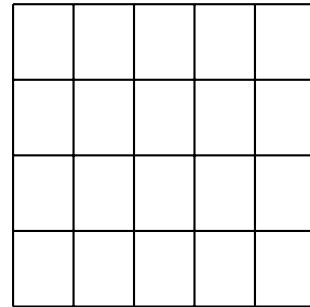
27.

$$\frac{7}{16}$$



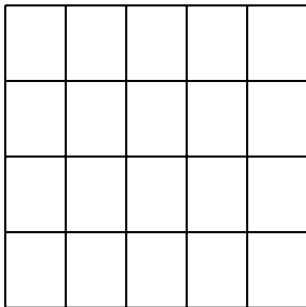
28.

$$\frac{3}{20}$$



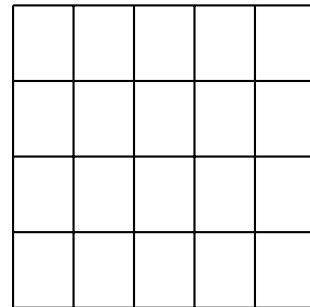
29.

$$\frac{6}{20}$$



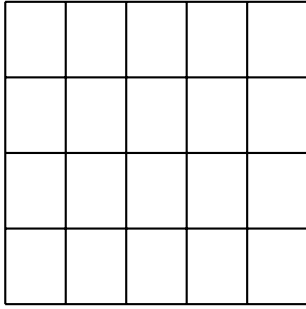
30.

$$\frac{7}{20}$$



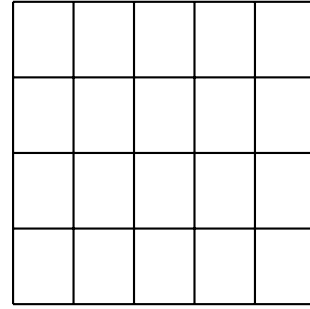
31.

$$\frac{9}{20}$$



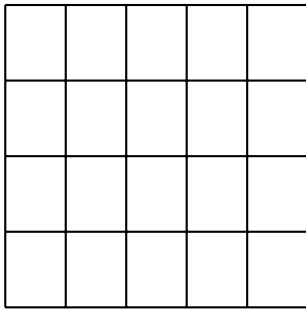
32.

$$\frac{14}{20}$$



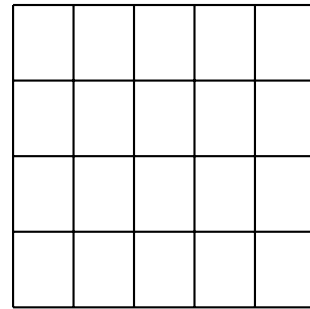
33.

$$\frac{19}{20}$$



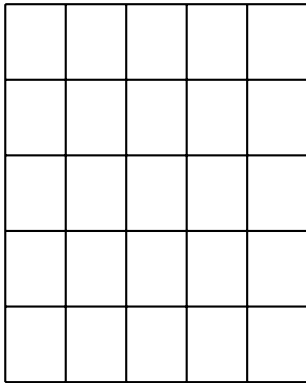
34.

$$\frac{20}{20}$$



35.

$$\frac{17}{25}$$



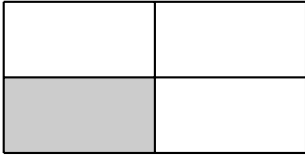
2 Answers

2.1 Exercise

Shade the diagram to represent the fraction.


1.

$\frac{1}{4}$




2.

$\frac{2}{4}$



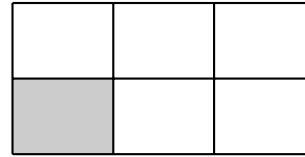
3.

$\frac{4}{4}$




4.

$\frac{1}{6}$



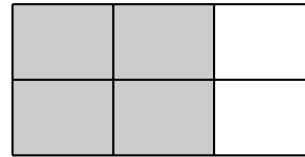
5.

$\frac{2}{6}$



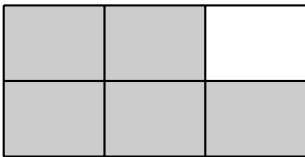
6.

$\frac{4}{6}$




7.

$\frac{5}{6}$



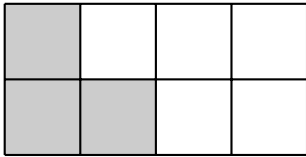
8.

$\frac{1}{8}$



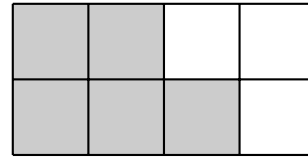
9.

$$\frac{3}{8}$$




10.

$$\frac{5}{8}$$




11.

$$\frac{6}{8}$$



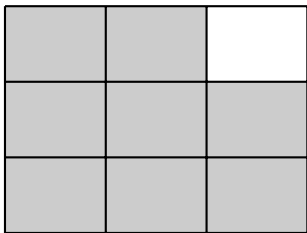
12.

$$\frac{8}{8}$$



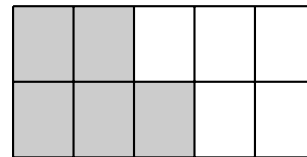
13.

$$\frac{8}{9}$$



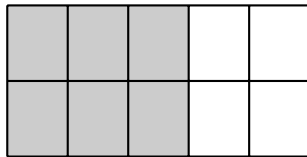
14.

$$\frac{5}{10}$$




15.

$$\frac{6}{10}$$



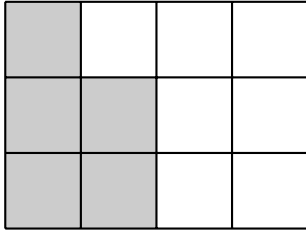
16.

$$\frac{10}{10}$$



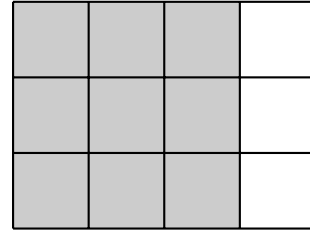
17.

$$\frac{5}{12}$$



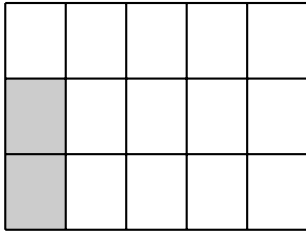
18.

$$\frac{9}{12}$$



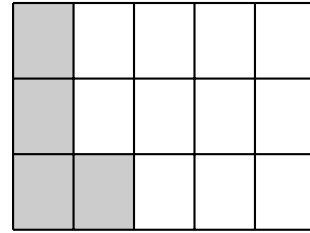
19.

$$\frac{2}{15}$$



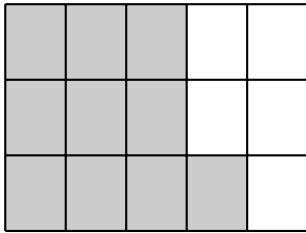
20.

$$\frac{4}{15}$$



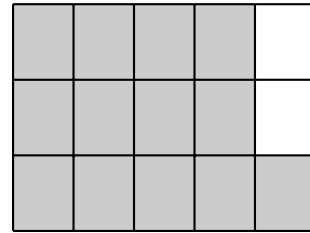
21.

$$\frac{10}{15}$$



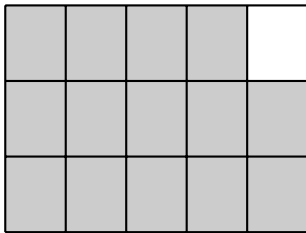
22.

$$\frac{13}{15}$$




23.

$$\frac{14}{15}$$



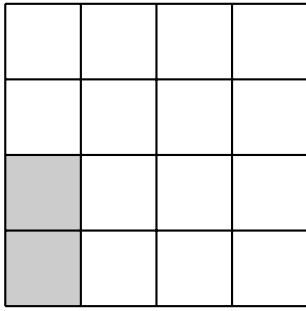
24.

$$\frac{15}{15}$$



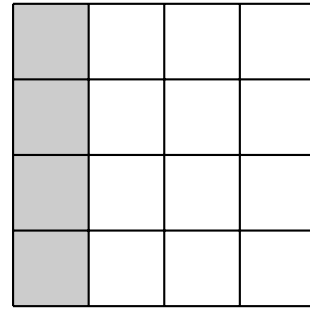
25.

$$\frac{2}{16}$$



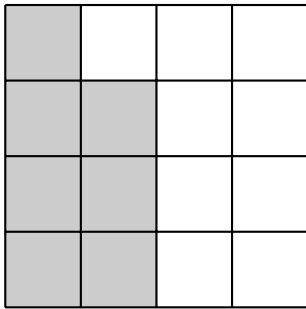
26.

$$\frac{4}{16}$$




27.

$$\frac{7}{16}$$



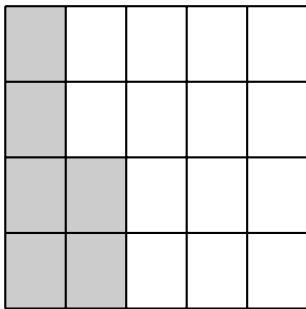
28.

$$\frac{3}{20}$$



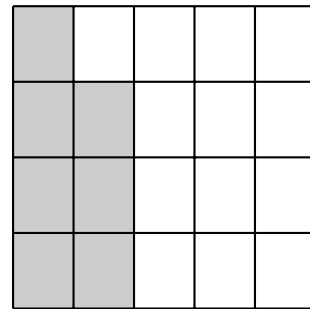
29.

$$\frac{6}{20}$$



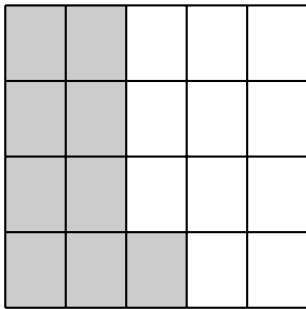
30.

$$\frac{7}{20}$$



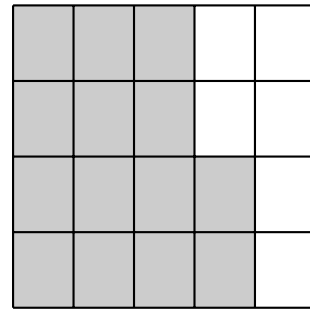
31.

$$\frac{9}{20}$$




32.

$$\frac{14}{20}$$




33.

$$\frac{19}{20}$$



34.

$$\frac{20}{20}$$



35.

$$\frac{17}{25}$$

