

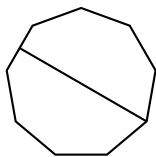
1 Exercises

1.1 Exercise

Shade the diagram to represent the fraction.

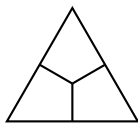
1.

$$\frac{1}{2}$$



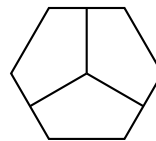
2.

$$\frac{1}{3}$$



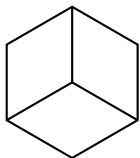
3.

$$\frac{1}{3}$$



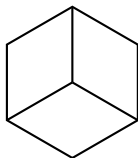
4.

$$\frac{1}{3}$$



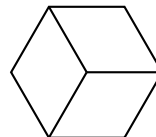
5.

$$\frac{1}{3}$$



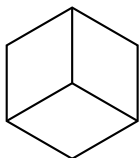
6.

$$\frac{1}{3}$$



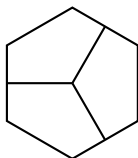
7.

$$\frac{2}{3}$$



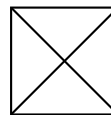
8.

$$\frac{2}{3}$$



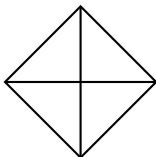
9.

$$\frac{1}{4}$$



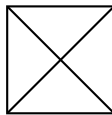
10.

$$\frac{1}{4}$$



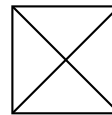
11.

$$\frac{2}{4}$$



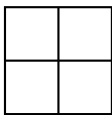
12.

$$\frac{3}{4}$$



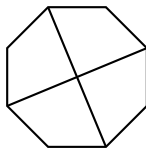
13.

$$\frac{3}{4}$$



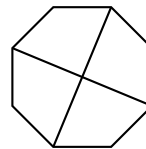
14.

$$\frac{3}{4}$$



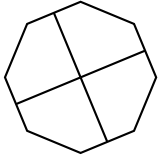
15.

$$\frac{3}{4}$$



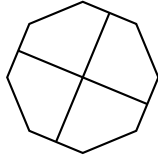
16.

$\frac{3}{4}$



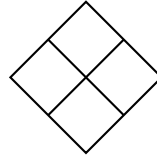
17.

$\frac{3}{4}$



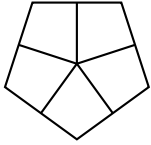
18.

$\frac{4}{4}$



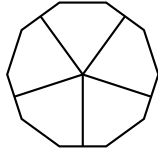
19.

$\frac{1}{5}$



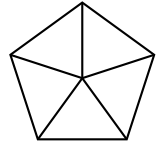
20.

$\frac{1}{5}$



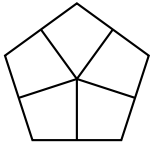
21.

$\frac{3}{5}$



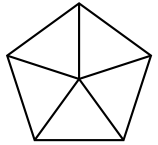
22.

$\frac{4}{5}$



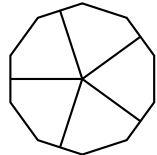
23.

$\frac{4}{5}$



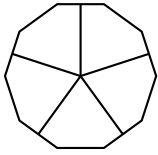
24.

$\frac{4}{5}$



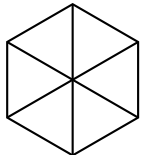
25.

$\frac{5}{5}$



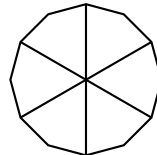
26.

$\frac{1}{6}$



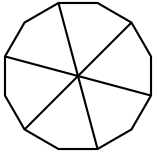
27.

$\frac{1}{6}$



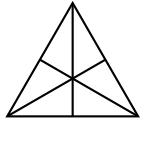
28.

$\frac{1}{6}$



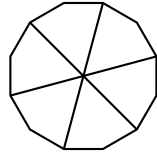
29.

$\frac{2}{6}$



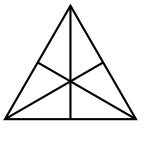
30.

$\frac{2}{6}$



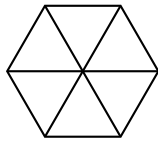
31.

$\frac{3}{6}$



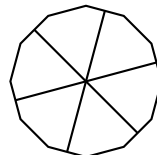
32.

$\frac{3}{6}$



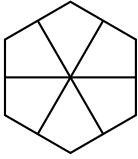
33.

$\frac{3}{6}$



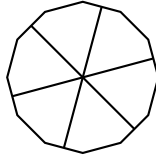
34.

$\frac{4}{6}$



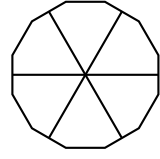
35.

$\frac{4}{6}$



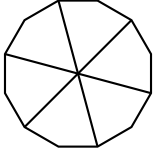
36.

$\frac{5}{6}$



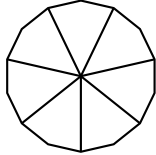
37.

$\frac{5}{6}$



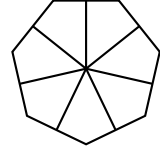
38.

$\frac{3}{7}$



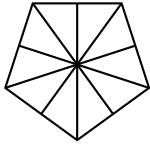
39.

$\frac{4}{7}$



40.

$\frac{5}{10}$



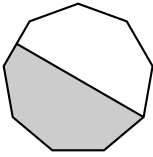
2 Answers

2.1 Exercise

Shade the diagram to represent the fraction.

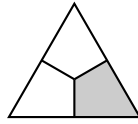
1.

$\frac{1}{2}$



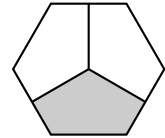
2.

$\frac{1}{3}$



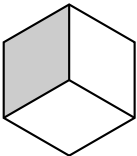
3.

$\frac{1}{3}$



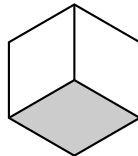
4.

$\frac{1}{3}$



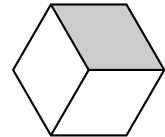
5.

$\frac{1}{3}$



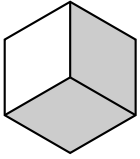
6.

$\frac{1}{3}$



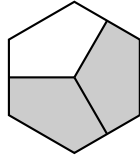
7.

$\frac{2}{3}$



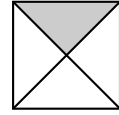
8.

$\frac{2}{3}$



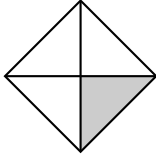
9.

$\frac{1}{4}$



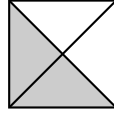
10.

$\frac{1}{4}$



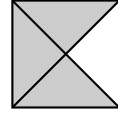
11.

$\frac{2}{4}$



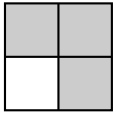
12.

$\frac{3}{4}$



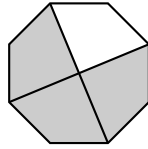
13.

$\frac{3}{4}$



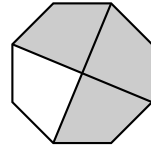
14.

$\frac{3}{4}$



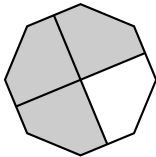
15.

$\frac{3}{4}$



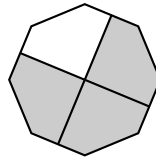
16.

$\frac{3}{4}$



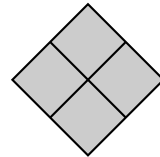
17.

$\frac{3}{4}$



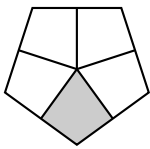
18.

$\frac{4}{4}$



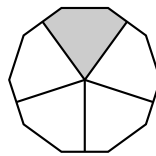
19.

$\frac{1}{5}$



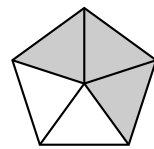
20.

$\frac{1}{5}$



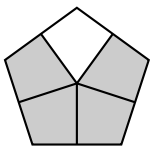
21.

$\frac{3}{5}$



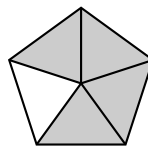
22.

$\frac{4}{5}$



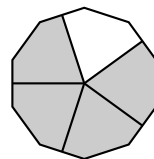
23.

$\frac{4}{5}$



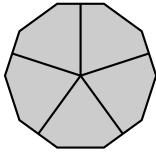
24.

$\frac{4}{5}$



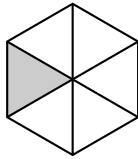
25.

$\frac{5}{5}$



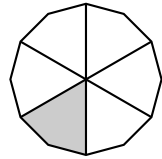
26.

$\frac{1}{6}$



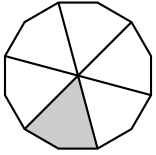
27.

$\frac{1}{6}$



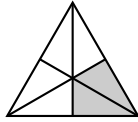
28.

$\frac{1}{6}$



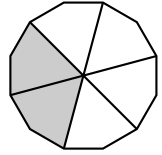
29.

$\frac{2}{6}$



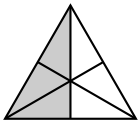
30.

$\frac{2}{6}$



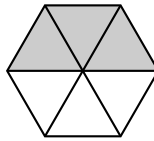
31.

$\frac{3}{6}$



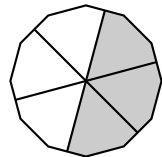
32.

$\frac{3}{6}$



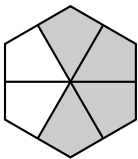
33.

$\frac{3}{6}$



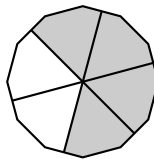
34.

$\frac{4}{6}$



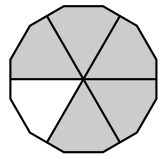
35.

$\frac{4}{6}$



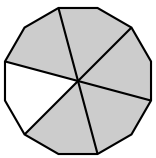
36.

$\frac{5}{6}$



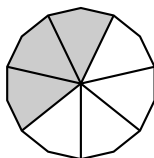
37.

$\frac{5}{6}$



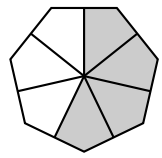
38.

$\frac{3}{7}$



39.

$\frac{4}{7}$



40.

$\frac{5}{10}$

