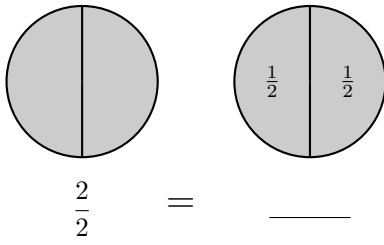


# 1 Exercises

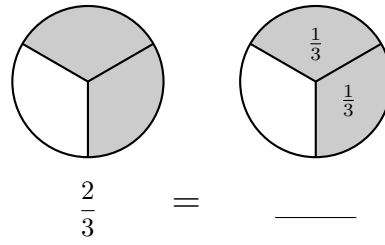
## 1.1 Exercise

What fraction is represented by the figure?

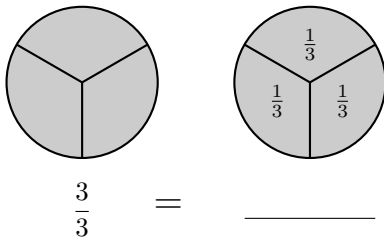
1.



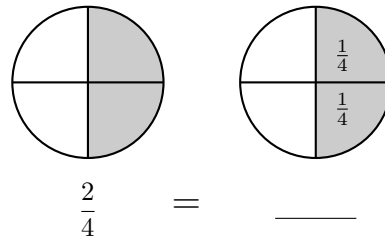
2.



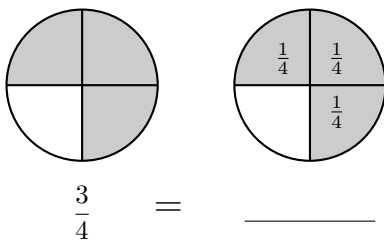
3.



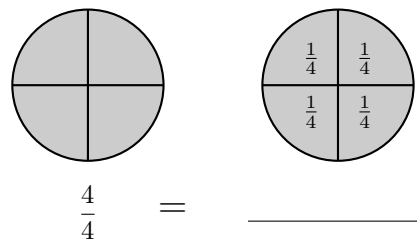
4.



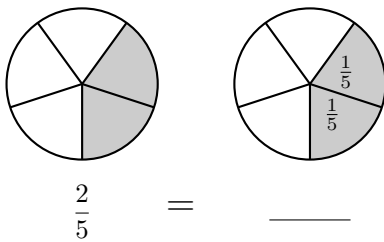
5.



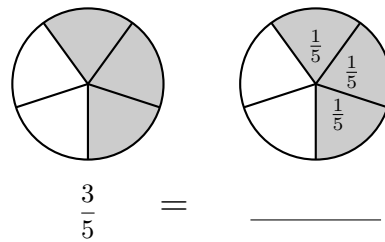
6.



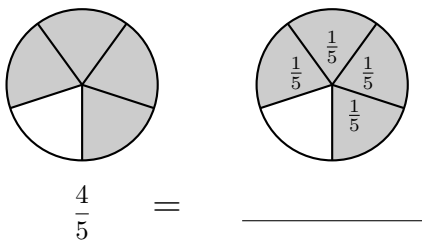
7.



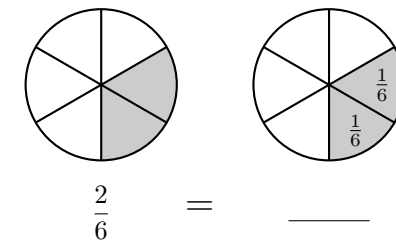
8.

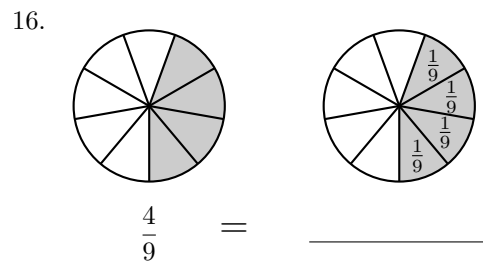
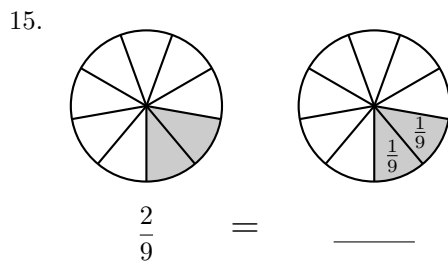
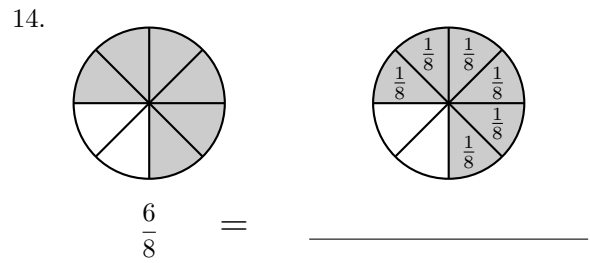
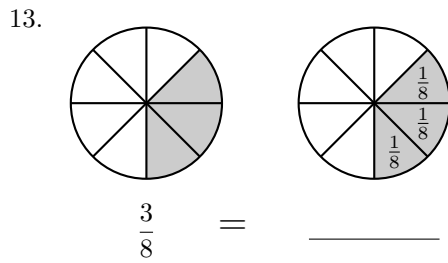
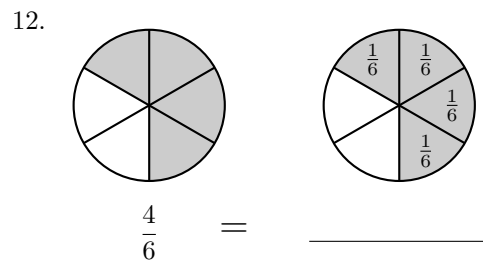
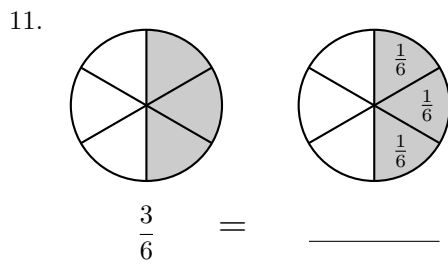


9.



10.

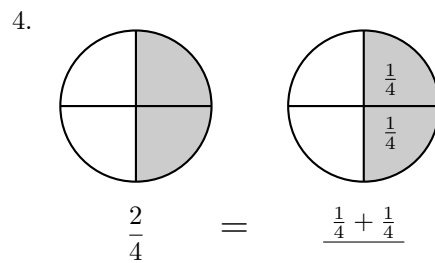
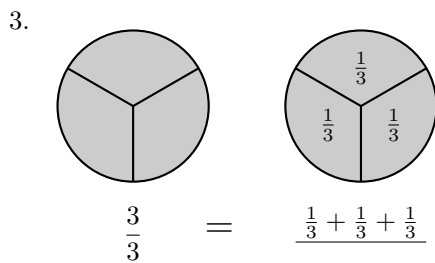
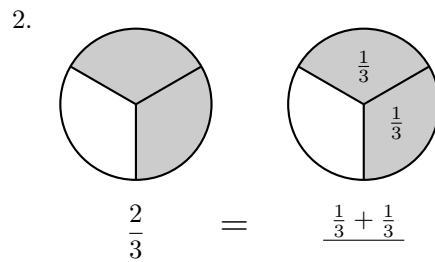
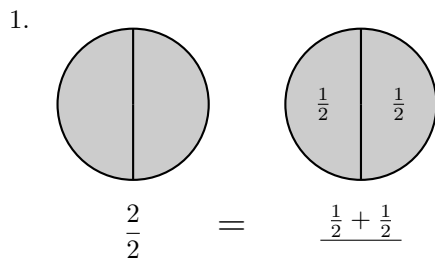




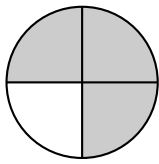
## 2 Answers

### 2.1 Exercise

What fraction is represented by the figure?

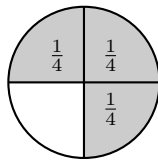


5.



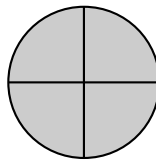
$$\frac{3}{4}$$

=



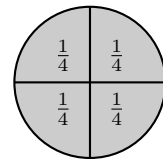
$$\frac{1}{4} + \frac{1}{4} + \frac{1}{4}$$

6.



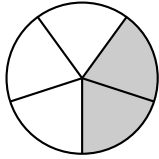
$$\frac{4}{4}$$

=



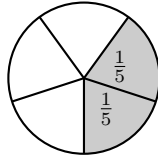
$$\frac{1}{4} + \frac{1}{4} + \frac{1}{4} + \frac{1}{4}$$

7.



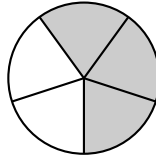
$$\frac{2}{5}$$

=



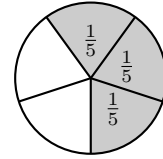
$$\frac{1}{5} + \frac{1}{5}$$

8.



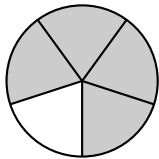
$$\frac{3}{5}$$

=



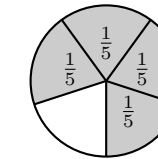
$$\frac{1}{5} + \frac{1}{5} + \frac{1}{5}$$

9.



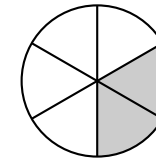
$$\frac{4}{5}$$

=



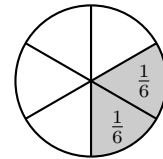
$$\frac{1}{5} + \frac{1}{5} + \frac{1}{5} + \frac{1}{5}$$

10.



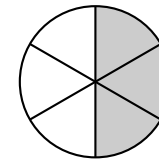
$$\frac{2}{6}$$

=



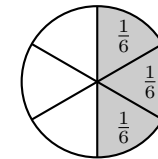
$$\frac{1}{6} + \frac{1}{6}$$

11.



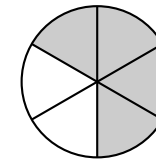
$$\frac{3}{6}$$

=



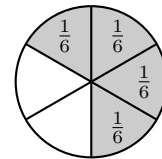
$$\frac{1}{6} + \frac{1}{6} + \frac{1}{6}$$

12.



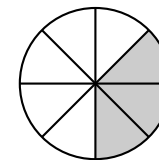
$$\frac{4}{6}$$

=



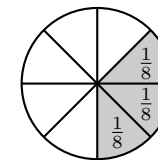
$$\frac{1}{6} + \frac{1}{6} + \frac{1}{6} + \frac{1}{6}$$

13.



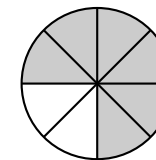
$$\frac{3}{8}$$

=



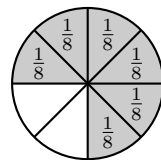
$$\frac{1}{8} + \frac{1}{8} + \frac{1}{8}$$

14.



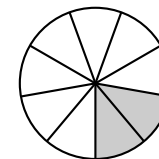
$$\frac{6}{8}$$

=



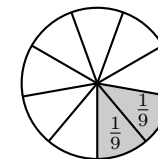
$$\frac{1}{8} + \frac{1}{8} + \frac{1}{8} + \frac{1}{8} + \frac{1}{8} + \frac{1}{8}$$

15.



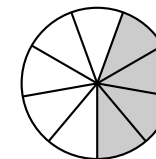
$$\frac{2}{9}$$

=



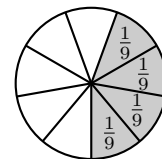
$$\frac{1}{9} + \frac{1}{9}$$

16.



$$\frac{4}{9}$$

=



$$\frac{1}{9} + \frac{1}{9} + \frac{1}{9} + \frac{1}{9}$$